

GS SAINT PIERRE NKOMBO

GEOGRAPHY HOLY DAY PACKAGES FOR S1 A and B ALL

SECOND TERM December 2023-2024

Q1. “Studying geography is important in Rwanda’s education system.”

Support this statement

Q2. (a) List at least 2 types of slopes.

(b) Name any 3 different ways that can be used to represent relief on topographical maps.

Q3. Describe the composition of the solar system.

Q4. List four characteristics of the moon.

.(a) Name two earth movements.

(b) Discuss the consequences of the rotation of the earth.

(c) Discuss the consequences of the revolution of the Earth.

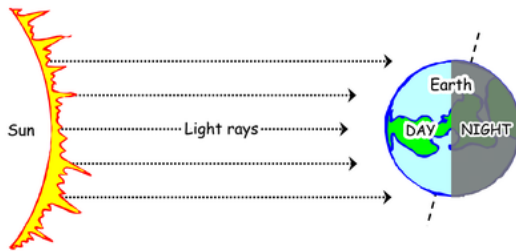
Q5. Distinguish between a latitude and a longitude.

Q6. With the use of well-labelled diagrams, describe the main types of eclipses.

Q7.(a) Name the components of the external structure of the earth

(b) Describe the components of the external structure of the earth.

Q8.What cause day and night?



Q9. With the aid of a well-labelled diagram, name different parts of the earth's structure.

Q10. Explain why the inner core of the earth is in a solid state.

Q11. Name the main minerals that form the following.

(a) Sial

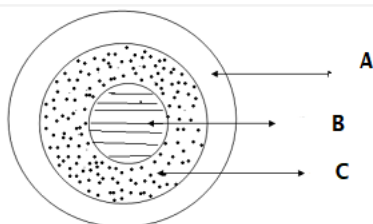
(b) Sima.

Q12. Distinguish between the Mohorovicic and the Gutenberg discontinuities.

Q13. (a) Define relief.

(b) Identify forms of relief.

Q14. Match the following elements



Q15. Name the relief features found in Rwanda.

Q16.The longitude of Harare(Zimbabwe) is 30E, if GMT is 8hours .What time at Harare?

Q17. Differentiate between slope, altitude and contours.

Q18. Discuss the importance of the relief features of Rwanda to the country.

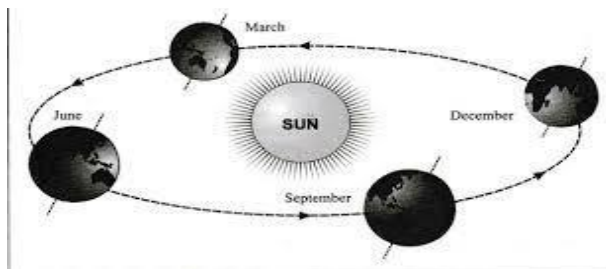
Q19. The longitude at Watanu (Tanzania) is 40E , if GMT is noon(12hrs) what is the local time at Watanu?

Q20. Explain how the relief features of Rwanda influence human activities in the country. 37. Suggest four ways through which Rwandans can preserve the relief features in the country.

Q21. Differentiate between atmosphere and hydrosphere. **(2Marks)**

Q22. State **two** proofs that the earth is spherical in shape **(2Marks)**

Q23. Study the diagram below and answer the questions that follow.



(a) Which movement of the earth is represented by the diagram?
(1Mark)

(b) Give **two** effects of the movement represented by the diagram.
(2Marks)

Do enjoy the beautiful of Geography 2024

END .